

**SOCIAL AND RELIGIOUS
STUDIES
PSRS
17/07/2023 1.30 PM - 3.30 PM**



Pupil's complete index number

Province/ City	District	Sector	School	Level	Pupil	Year
<input type="checkbox"/>	<input type="checkbox"/>	<input type="checkbox"/>	<input type="checkbox"/>	<input type="checkbox"/>	<input type="checkbox"/>	<input type="checkbox"/>

Pupil's names

Surname:.....

Other names:.....

NB: PUPIL'S INDEX NUMBER AND NAMES
MUST BE WRITTEN AS THEY APPEAR ON THE
REGISTRATION FORM

PRIMARY LEAVING NATIONAL EXAMINATIONS, 2022-2023


Social and Religious studies

Duration: Two hours

Marks: /100

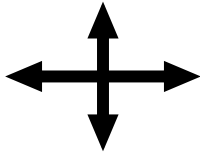
INSTRUCTIONS

- 1) Do not open this paper until you are told to do so.
- 2) Read each question carefully before answering it.
- 3) All questions are compulsory and must be answered as instructed.
- 4) Answer all the questions in this question paper.
- 5) You must use a **blue** or **black** pen.



ATTEMPT ALL QUESTIONS.

1) Using the compass directions below, indicate the main cardinal points.



..... **(2 marks)**

2) Explain any two uses of a map.

a) **(1 mark)**

b) **(1 mark)**

3) State any two effects of gender-based violence in a community.

a) **(1 mark)**

b) **(1 mark)**

4) Identify any two ways of preventing sexual abuse in your country.

a) **(1 mark)**

b) **(1 mark)**

5) Explain any two ways through which people can reduce the occurrence of chronic diseases in a society.

a) **(1 mark)**

b) **(1 mark)**

6) Draw a table of two columns to separate sexually transmitted diseases (STDs) from waterborne diseases given below. **(3 marks)**

- a) Typhoid fever
- b) HIV/AIDS
- c) Gonorrhoea
- d) Dysentery

7) State any two types of budgets.

a) (1 mark)

b) (1 mark)

8) Given below are incomes and expenditures on items of a family budget.

Use this list of incomes and expenditures on items to fill the table below.

(3 marks)

Incomes on items

Sale of Sweet banana 70,000 Frw

Sale of pumpkins 3,000 Frw

Sale of carrots 3,000 Frw

Sale of beans 20,000 Frw

Sale of maize 60,000 Frw

Expenditures on items

Buying ball point pens 3,000 Frw

Buying exercise books 3,000 Frw

Buying pancakes 1,000 Frw

Buying balloons 1,000 Frw

Buying a school bag 5,000 Frw

Incomes on items	Amount	Expenditures on items	Amount
Total Income		Total expenditure	

9) Identify any two examples of criminal behaviour.

a) (1 mark)

b) (1 mark)

10) State any two colours that make up the National flag of Rwanda.

a) (1 mark)

b) (1 mark)

11) Give any two reasons why good leadership is important in your district.

a) (1 mark)

b) (1 mark)

12) Choose two elements that can cause disharmony in your community.

a) Sharing

b) Fighting

c) Forgiveness

d) Stealing

..... (1 mark)

.....(1 mark)

13) Give any two reasons why people save money.

a)(1 mark)

b)(1 mark)

14) State any two human activities that can cause damage to our environment.

a)(1 mark)

b) (1 mark)

15) A certain place has 1,500 km² of surface area and the population size of 450,000 people. **Required:** Find the population density.

.....(2 marks)

16) Suggest any two ways in which the government can help the people in rural areas to increase agricultural production.

a) (1 mark)

b) (1 mark)

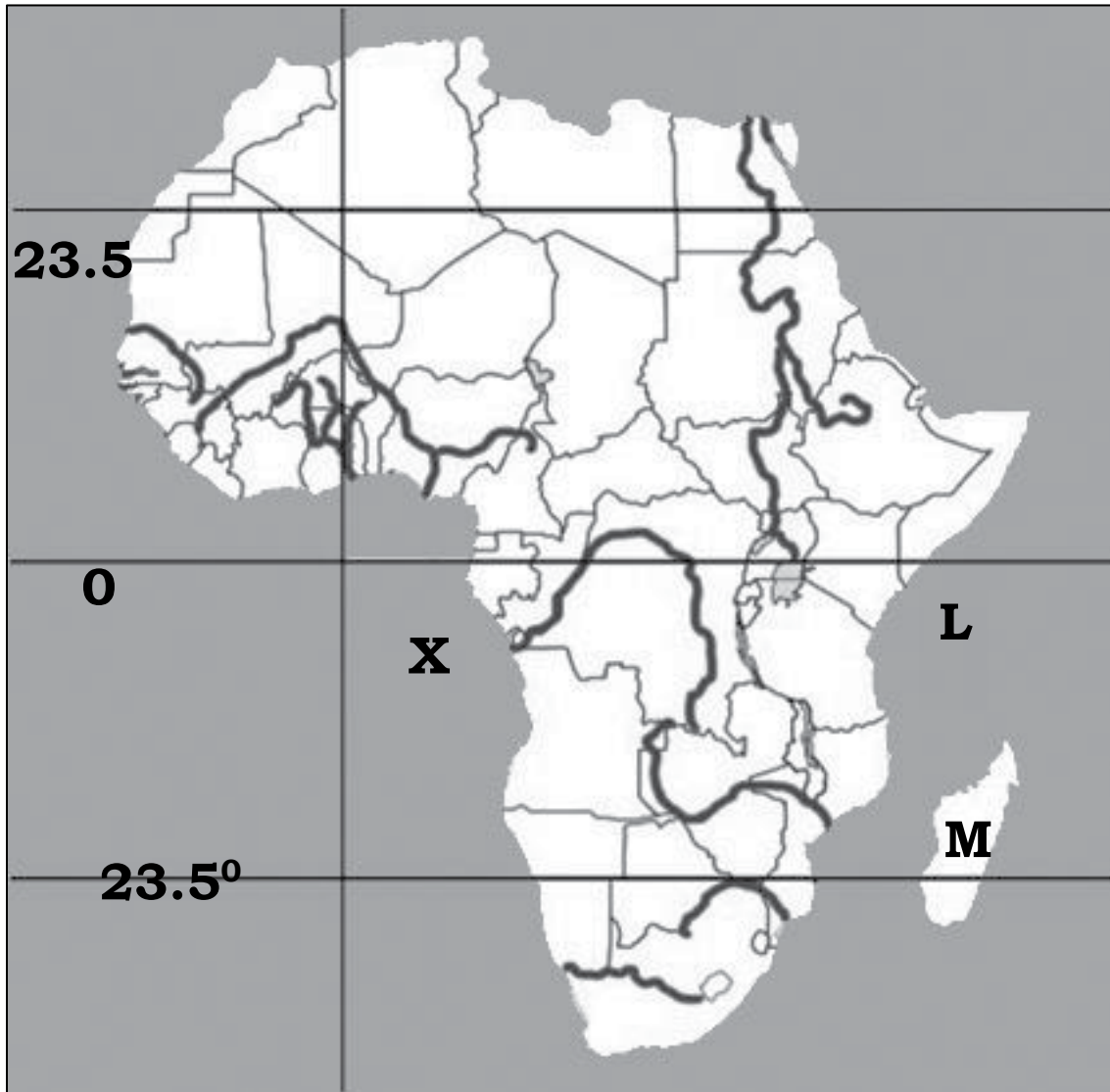
17) Why do people migrate from one place to another?

a)(1 mark)

b) (1 mark)

- 18) Suggest any two ways of preserving flora and fauna.
- a)(1 mark)
- b)(1 mark)
- 19) What is the role of transport and communication to the development of your country?
- a)(1 mark)
- b)(1 mark)
- 20) a) Which organ is responsible for protecting our country and its borders?
- i) Rwanda defense force (RDF)
- ii) Prisons Force.
- iii) The National Services.
-(1 mark)
- b) The United Nations Organ which is responsible for crop quality assurance is known as:
- i) UNICEF
- ii) FAO
- iii) WHO
-(1 mark)
- 21) List down any two types of clouds.
- a) (1 mark)
- b)(1 mark)

22) Study the map of Africa below and answer the questions that follow.



a) Name the oceans marked **X** and **L**.

X:..... (1 mark)

L:..... (1 mark)

b) Name an island country marked **M**.

.....(1 mark)

23) Name any two categories of chiefs who helped the king to rule in pre-colonial Rwanda.

a) (1 mark)

b) (1 mark)

24) Complete the following sentences with suitable terms.

- a)is the buying and selling of goods. **(1 mark)**
- b)is the exchange of goods for other goods.
(1 mark)

25) Choose one chief who was responsible for settling disputes related to crop cultivation.

- a) Chief of cattle
- b) Chief of land
- c) Military chief

..... **(1 mark)**

26) Give one effect of Arab and European traders in East Africa since the 19th century.

.....**(1 mark)**

27) a) Name the land promised by God to Abram

.....**(1 mark)**

b) The unique son of Abraham and Sarah was

.....**(1 mark)**

28) State any two articles of the Islamic faith.

a)**(1 mark)**

b)**(1 mark)**

29) Give any two signs of Covenant between God and Abraham.

a) **(1 mark)**

b) **(1 mark)**

30) What is the meaning of the following terms?

a) Shirk**(1 mark)**

b) Tawheed..... **(1 mark)**

31) Name any two patriarchs with whom God made covenants.

a) **(1 mark)**

b) **(1 mark)**

32) Mention any two basic elements of the Bible.

- a) (1 mark)
- b) (1 mark)

33) Outline any two major signs before the last day of judgement according to the Islamic beliefs.

- a)(1 mark)
- b)(1 mark)

34) Mention two elements of behaviour you would require when choosing a friend.

- a) (1 mark)
- b)(1 mark)

35) State whether the statements below are **True** or **False**.

- a) Wine is an unclean thing according to Islamic faith.
- b) Menstrual blood is not an impurity in Islam.

- a)(1 mark)
- b)(1 mark)

36) What kind of good behaviour do Christian families have that show their kindness and love to their neighbours?

- a) (1 mark)
- b)(1 mark)

37) How do sins affect sinners?

- a) (1 mark)
- b)..... (1 mark)

38) Identify any two reasons why human beings are unique from other creatures.

- a)(1 mark)
- b)(1 mark)

39) Match the following biblical terms with their meanings: **(2 marks)**

Biblical terms	Meanings
Testament	Law
Torah	Five books of Moses
Pentateuch	Good news
Gospel	Alliance

40) Give two reasons why Angels were created according to Islamic faith.

a) **(1 mark)**

b) **(1 mark)**

41) List two reasons why fasting is very important for Muslims.

a) **(1 mark)**

b) **(1 mark)**

42) The place where Muslims go to learn how to recite the holy Qur'an is

..... **(1 mark)**

43) Outline two reasons why the Ten Commandments are important to Christians.

a) **(1 mark)**

b) **(1 mark)**

44) Explain the purpose for which God created man.

a) **(1 mark)**

b) **(1 mark)**

45) Select only two names of angels from the list below.

- Gabriel
- Abraham
- Michael
- Noah

a) **(1 mark)**

b) **(1 mark)**

46) Given below are major religions of the world. Draw a two-column table to indicate the places of worship with their religions. *Choose any two religions.*

(2 marks)

Religions	Places of worship
Christianity	
Islam	
Judaism	

47) Who received the ten commandments from God on Mount Sinai?

..... **(1 mark)**

48) Name the Angel who brought a message to Mary.

..... **(1 mark)**

49) List down any two types of conflicts according to Islamic faith.

a)**(1 mark)**

b) **(1 mark)**

50) a) Give two forms of sexual abuse that are common.

i)**(1 mark)**

ii) **(1 mark)**

b) Give two things that Christians can do in order to prevent sexual abuse.

i) **(1 mark)**

ii) **(1 mark)**

-END-

BLANK PAGE